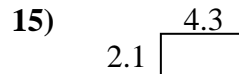
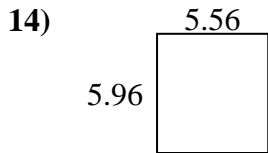
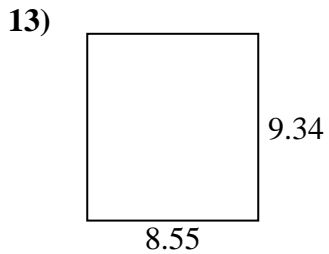
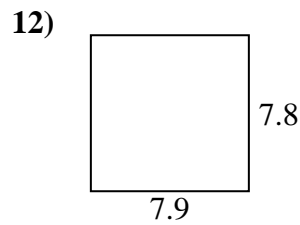
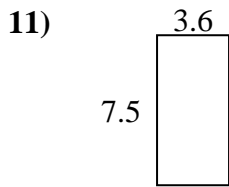
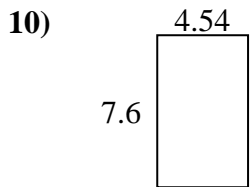
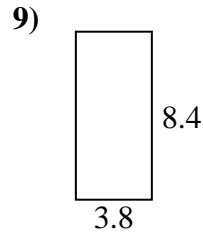
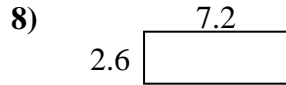
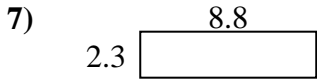
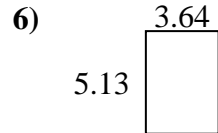
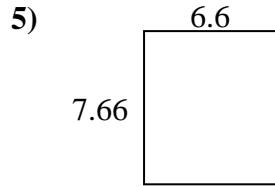
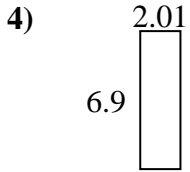
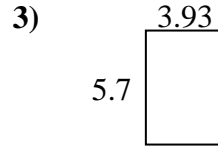
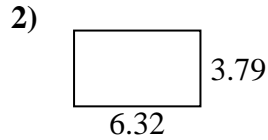
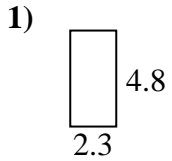




Find the perimeter and area of each figure. Answer to the nearest 10th.

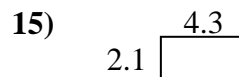
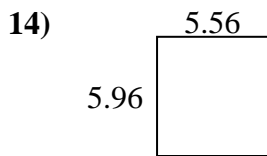
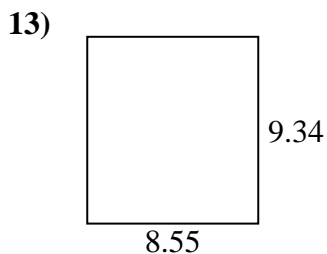
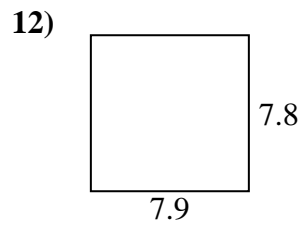
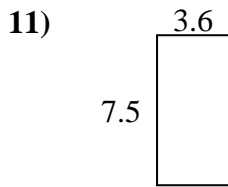
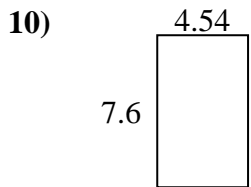
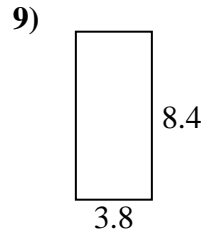
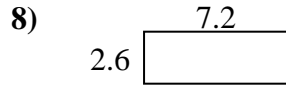
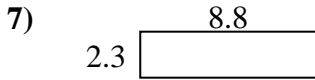
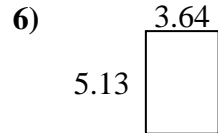
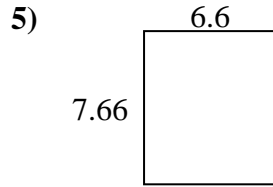
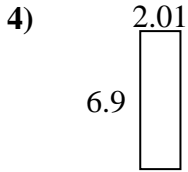
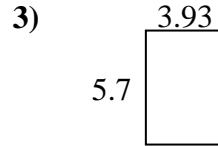
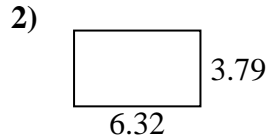
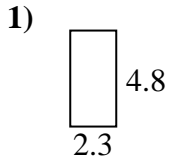


Answers

1. _____
2. _____
3. _____
4. _____
5. _____
6. _____
7. _____
8. _____
9. _____
10. _____
11. _____
12. _____
13. _____
14. _____
15. _____



Find the perimeter and area of each figure. Answer to the nearest 10th.



Answers

1.	<u>11.0</u>	<u>14.2</u>
2.	<u>24.0</u>	<u>20.2</u>
3.	<u>22.4</u>	<u>19.3</u>
4.	<u>13.9</u>	<u>17.8</u>
5.	<u>50.6</u>	<u>28.5</u>
6.	<u>18.7</u>	<u>17.5</u>
7.	<u>20.2</u>	<u>22.2</u>
8.	<u>18.7</u>	<u>19.6</u>
9.	<u>31.9</u>	<u>24.4</u>
10.	<u>34.5</u>	<u>24.3</u>
11.	<u>27.0</u>	<u>22.2</u>
12.	<u>61.6</u>	<u>31.4</u>
13.	<u>79.9</u>	<u>35.8</u>
14.	<u>33.1</u>	<u>23.0</u>
15.	<u>9.0</u>	<u>12.8</u>